







# Conversions








How many millilitres in?	How many litres in?
1 litre	1000 ml
2 litres	2000 ml
0.25 litres	250 ml
1/5 litre	200 ml

	5 drinks cans 	3 water bottles 	6 glasses 	2 sinks full 
How many millilitres?				
How many litres?				

## How many litres are used?

Use the signs > or < to show which activity uses the larger amount of water

Choose the correct sign > or <

<p>Water the garden with a hose for 30 minutes (150 litres per 10 minutes)</p> 		<p>Water garden with 5 watering cans full</p> 
<p>Wash the car with a hose for 15 minutes (150 litres per 10 minutes)</p> 		<p>Wash the car with 2 buckets of water and a sponge</p> 
<p>3 baths each week</p> 		<p>6 short showers each week</p> 
<p>Use the dishwasher 3 times a week</p> 		<p>Wash up once each day in a plugged sink</p> 